

Basic Fraction Worksheets Review - 2

www.fractionsworksheets.ca


In this worksheet, write the fraction for the shaded part of each picture for every problem. Problem number 1 and 2 are done as an example for you:

1.



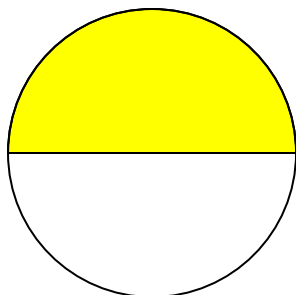
$$\frac{5}{6}$$

2.

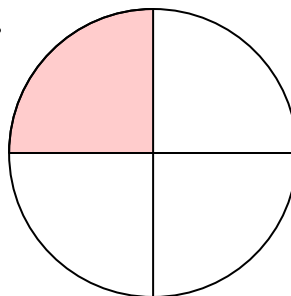


$$\frac{2}{2}$$

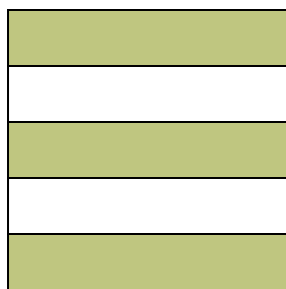
3.



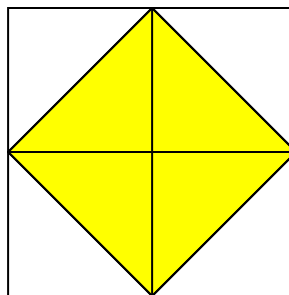
4.



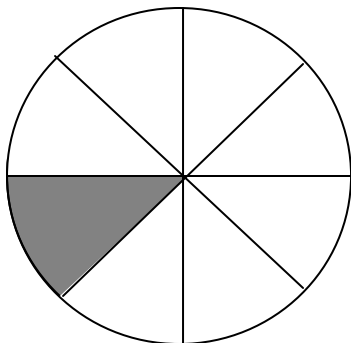
5.



6.



7.



8.

